
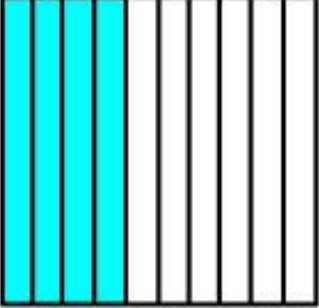






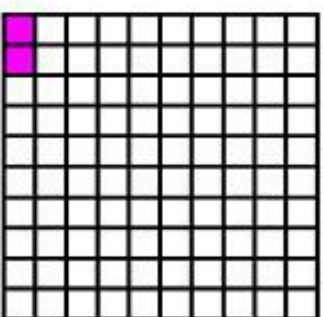


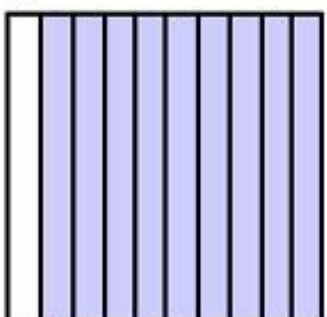


Name: _____

Decimals: Hundredths and Tenths

Write the decimal and the fraction of each shaded part.

<p>a.</p>  <p>_____</p>	<p>b.</p>  <p>_____</p>	<p>c.</p>  <p>_____</p>	<p>d.</p>  <p>_____</p>
<p>e.</p>  <p>_____</p>	<p>f.</p>  <p>_____</p>	<p>g.</p>  <p>_____</p>	<p>h.</p>  <p>_____</p>
<p>i.</p>  <p>_____</p>	<p>j.</p>  <p>_____</p>	<p>k.</p>  <p>_____</p>	<p>l.</p>  <p>_____</p>