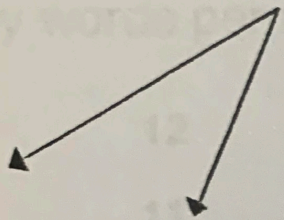



WEDNESDAY

Geometry and Spatial Sense


1. Classify the angle.



2. Classify the angle.



3. Draw the reflection:



4. Draw a net for a pyramid.

5. How many edges does a rectangular prism have?

